



**INDIAN SCHOOL AL WADI AL KABIR
DEPARTMENT OF MATHEMATICS**

REVISION WORKSHEET

RESOURCE PERSON: MRS PRAJETHA K

NAME: _____ CLASS: I SEC: _____ DATE: _____

Q1. Write the number names of the given numerals.

a. 62 - _____

b. 58 - _____

c. 73 - _____

d. 20 - _____

e. 46 - _____

Q2. Arrange the given numbers in descending order.

| | | | | |
|----|----|----|----|----|
| a. | 35 | 47 | 23 | 50 |
| | | | | |

| | | | | |
|----|----|----|---|----|
| b. | 16 | 28 | 8 | 41 |
| | | | | |

| | | | | |
|----|----|----|----|----|
| c. | 49 | 33 | 46 | 25 |
| | | | | |



Q3. Vocabulary Sums

- a. The sum of 4 and 3 is _____.
- b. _____ comes before 73.
- c. $58 =$ _____ tens and _____ ones
- d. 10 and 5 is _____.
- e. One more than 69 is _____.
- f. The numeral for Eighty is _____.

Q4. Add the following horizontally.

- a. $50 + 5 =$ _____
- b. $12 + 0 =$ _____
- c. $16 + 4 =$ _____
- d. $32 + 5 =$ _____

Q5. Add the following vertically.

a.

| | | |
|---|---|---|
| | 3 | 4 |
| + | | 5 |
| | | |

b.

| | | |
|---|---|---|
| | 5 | 2 |
| + | 1 | 6 |
| | | |







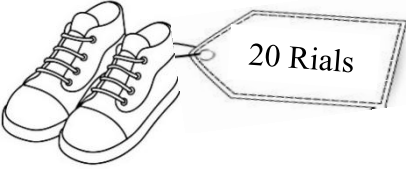

c.

| | | |
|---|---|---|
| | 4 | 2 |
| + | 2 | 1 |
| | | |

d.

| | | |
|---|---|---|
| | 6 | 0 |
| + | 1 | 3 |
| | | |

Q6. Match the following

| | |
|--|---|
| <p>1.</p>  | <p>a.</p>  |
| <p>2.</p>  | <p>b.</p>  |
| <p>3.</p>  | <p>c.</p>  |
| <p>4.</p>  | <p>d.</p>  |

Ans: 1. _____ 2. _____ 3. _____ 4. _____

Q7. Solve the story sums.


- a. There are 22 boys and 13 girls in class 1. How many students are there in the class?



| | |
|---|---|
| T | O |
| | |
| | |
| | |

Ans: _____ students


b. Maya has 12 teddy bears on her bed. She finds 15 more in her toy box. How many teddy bears does Maya have in total?



| T | O |
|---|---|
| | |
| | |
| | |

Ans: _____ teddy bears

c. There are 33 tall trees and 14 short trees in a park. How many trees are there altogether?



| T | O |
|---|---|
| | |
| | |
| | |

Ans: _____ trees
